




Extra Practice 4**Lesson 7: Relating Division and Repeated Subtraction**

- Write a division sentence for each repeated subtraction.
 - $5 - 1 - 1 - 1 - 1 - 1 = 0$
 - $12 - 3 - 3 - 3 - 3 = 0$
 - $6 - 2 - 2 - 2 = 0$
- Write each division sentence as repeated subtraction.
 - $20 \div 4 = 5$
 - $9 \div 3 = 3$
- How is $16 - 4$ different than $16 \div 4$?

Lesson 8: Relating Multiplication and Division Using Arrays

- Write a multiplication and division sentence for each picture.
 - 
 - 
 - 
- Use counters to make an array for each number. For each array, write 2 multiplication sentences and 2 division sentences.
 - 6
 - 10
 - 15
- Jeremy is putting his baseball cards into an album. Each page can hold 16 cards. Each page has 4 rows of pockets. How many cards can go in each row?