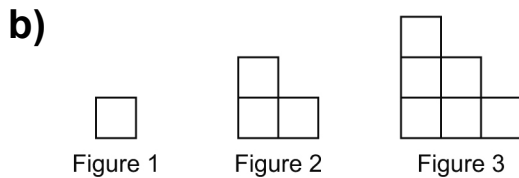
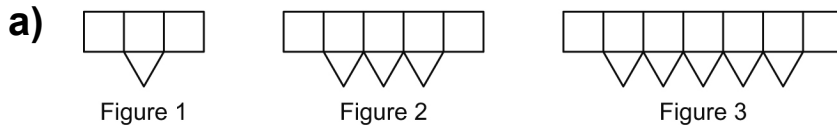


Extra Practice 1

Lesson 1: Exploring Increasing Patterns

1. Use Pattern Blocks.

Make the next 2 figures in each increasing pattern.




2. Write the pattern rule for each pattern in question 1.

Lesson 2: Creating Increasing Patterns

1. Start with 4 squares. Add 3 squares each time.
Draw the first 3 figures of this pattern on grid paper.

2. Figure 3 is missing in this increasing pattern.



Sketch what it should be.
Explain how you know.