

### Extra Practice 3

#### Lesson 4: Increasing Number Patterns

- Fill in the missing numbers. Write the pattern rule.
  - 17, 27, 37, \_\_\_\_\_, \_\_\_\_\_, \_\_\_\_\_, \_\_\_\_\_
  - 48, 50, \_\_\_\_\_, \_\_\_\_\_, \_\_\_\_\_, 58, \_\_\_\_\_
- Write the first 6 numbers in each pattern.
  - Start at 28. Add 10 each time.
  - Start at 35. Add 5 each time.
- Use numbers and words to describe this pattern.

61	62	63	64	65	66	67	68	69	70
71	72	73	74	75	76	77	78	79	80

#### Lesson 6: Exploring Decreasing Patterns




- Draw the next 2 figures in each decreasing pattern.
  - 



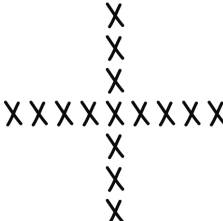
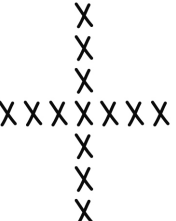
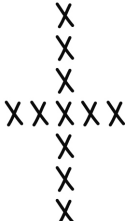
Figure 1                  Figure 2                  Figure 3
  - 



Figure 1                  Figure 2                  Figure 3
- Write the pattern rule for each pattern in question 1.